














Progressive Education Network

Paper Mathematics Class 1, First Term Exam 2022

O.M													
Q.No	1	2	3	4	5	6	7	8	9	10	11	12	Total Marks: 50

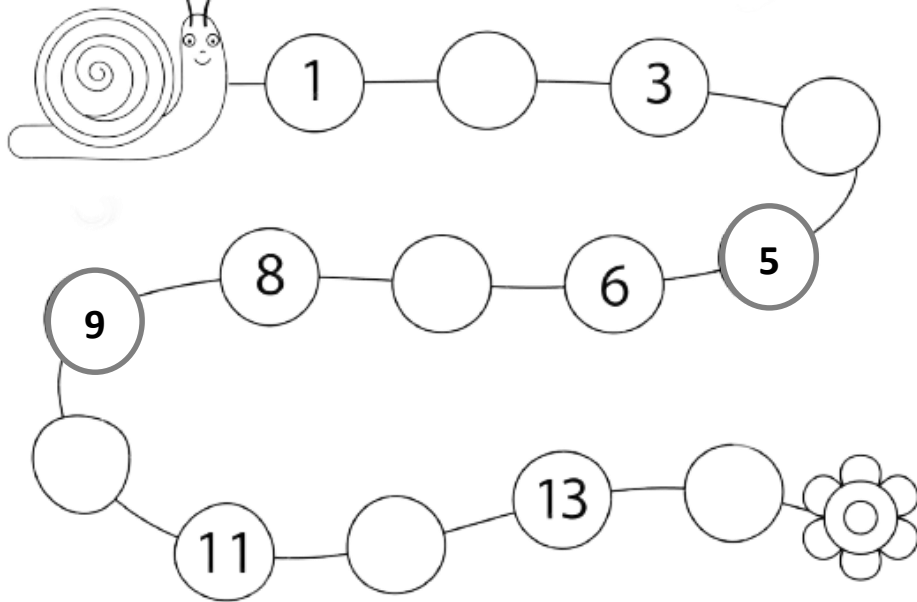
Name of Student: _____ Name of Teacher: _____ School: _____

Date: _____ Time Allowed: 1:15 Hour

Q1. Match the objects with correct numbers. (5) اشیاء کو صحیح اعداد کے ساتھ ملائیں۔	Q2. Write the numbers in ascending order. (6) اعداد کو ترتیب سے لکھیں۔
 5  3  1  4  2	50 45 54    15 12 30   

Q3. Write the missing numbers. (6)



خالی جگہ پر اعداد لکھیں۔



Q4. Count and add the numbers. (6)

اعداد کو گنیں اور جمع کریں۔

	+		=	<input type="text"/>
<input type="text"/>		<input type="text"/>		<input type="text"/>

	+		=	<input type="text"/>
<input type="text"/>		<input type="text"/>		<input type="text"/>

Q5. Count backward and write the numbers. (6)











اٹنی گنتی کریں اور خالی جگہ پر اعداد لکھیں۔

15 _____ 11

7 _____ 3

Q6.Match with ordinal numbers. (5)

ترتیبی اعداد کے ساتھ ملائیں۔

1. 	• Second	6. 	• Tenth
2. 	• Third	7. 	• Eighth
3. 	• Fifth	8. 	• Sixth
4. 	• First	9. 	• Ninth
5. 	• Fourth	10. 	• Seventh


Q7.Umer had 18 strawberries. He ate 6 strawberries. How many strawberries were left? (3)

Umer had strawberries =

-			

Q8.Circle the objects that are longer.(3)

لمبی اشیاء کے گرد دائرہ لگائیں۔



Q9. Ask the students to say table of 3. (10)

تین کا پہاڑہ سنائیں۔